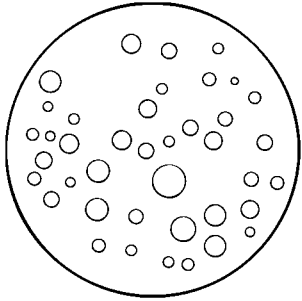
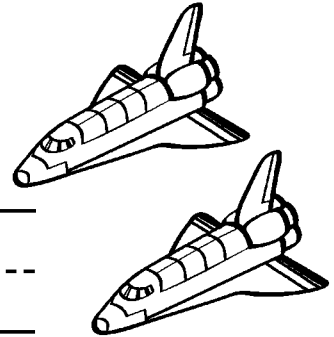




Name _____

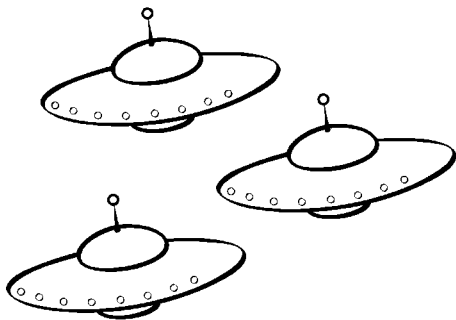
Count the items in each group and write the number words next to them.







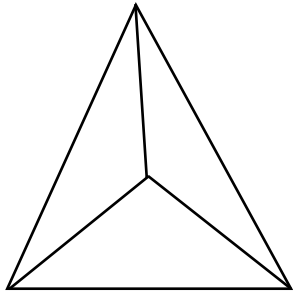




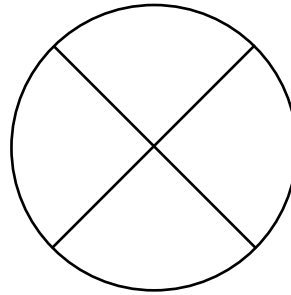
one two three four five

Name _____

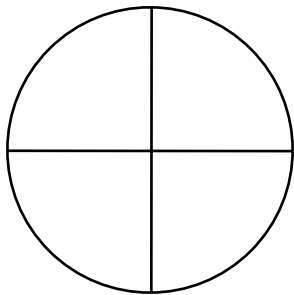
Shade $\frac{2}{3}$ of the triangle.




Shade $\frac{1}{2}$ of the circle.




Shade $\frac{1}{4}$ of the circle.



Shade $\frac{1}{3}$ of the rectangle.

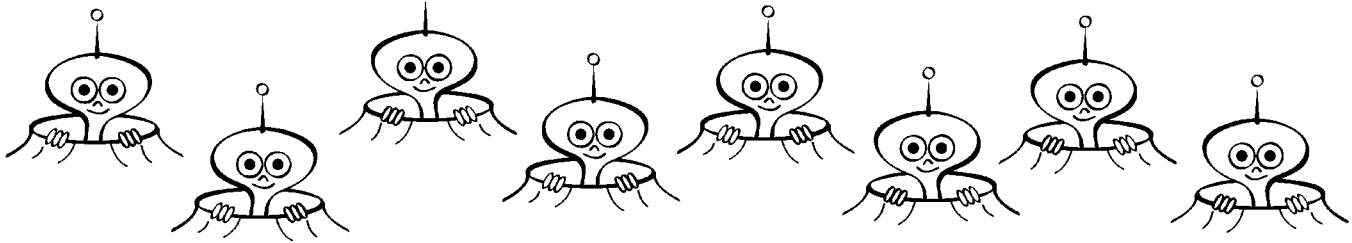


Shade $\frac{3}{8}$ of the planet.



Name _____


Solve these problems.



Color 3 aliens red. Color the rest green.

How many aliens are green? _____

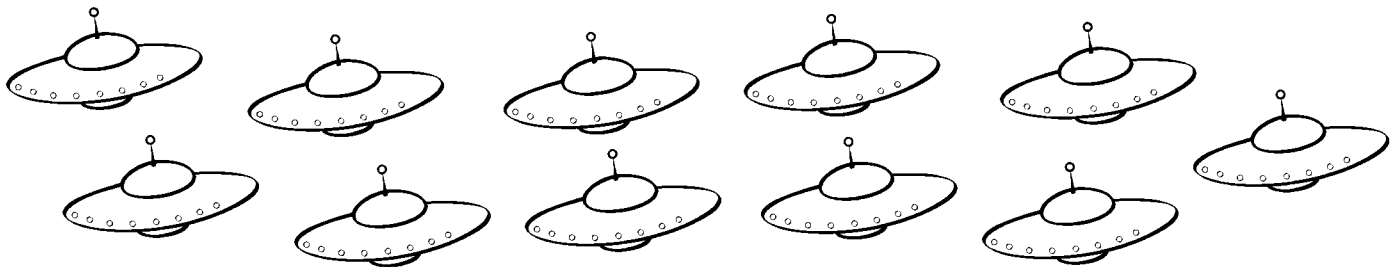
How many aliens total? 3 + _____ = _____



Color 6 planets blue. Color the rest yellow.

How many planets are yellow? _____

How many planets total? 6 + _____ = _____



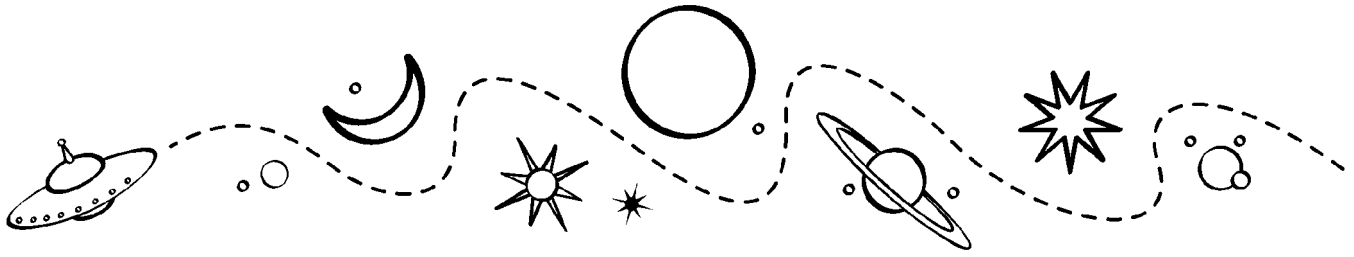
Color 7 spaceships purple. Color the rest orange.

How many spaceships are orange? _____

How many spaceships total? 7 + _____ = _____

Name _____

Find the answers by adding the numbers below.



$0 + 7 + 8 = \underline{\quad}$

$3 + 2 + 5 = \underline{\quad}$

$8 + 5 + 7 = \underline{\quad}$

$4 + 3 + 8 = \underline{\quad}$

$3 + 6 + 1 = \underline{\quad}$

$9 + 1 + 6 = \underline{\quad}$

$2 + 4 + 6 = \underline{\quad}$

$2 + 3 + 4 = \underline{\quad}$

$1 + 3 + 5 + 7 = \underline{\quad}$

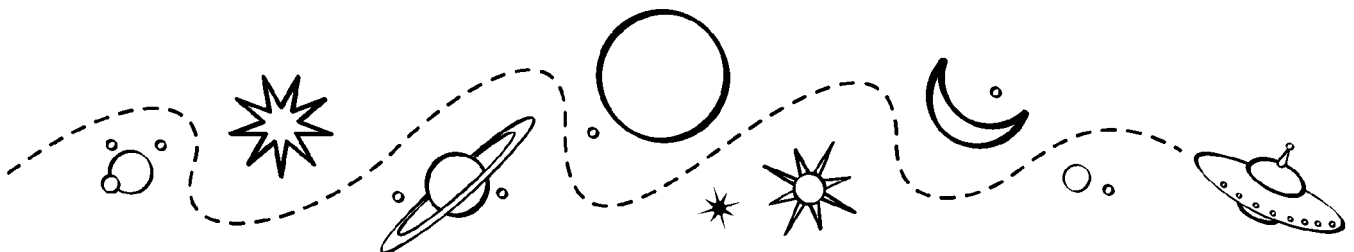
$8 + 7 + 3 + 2 = \underline{\quad}$

$5 + 5 + 9 + 6 = \underline{\quad}$

$5 + 4 + 2 + 7 = \underline{\quad}$

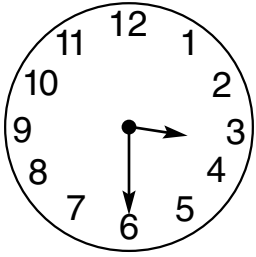
$8 + 2 + 6 + 7 = \underline{\quad}$


$9 + 4 + 1 + 0 = \underline{\quad}$

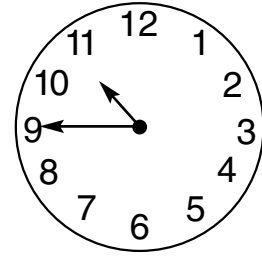


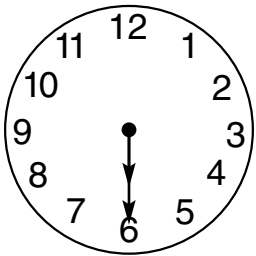
Name _____

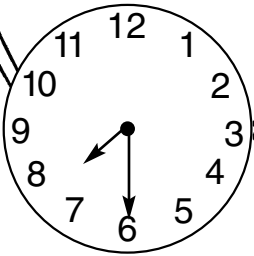
What time is it? Write the correct time on each line.

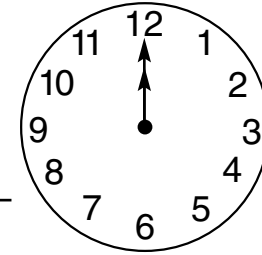


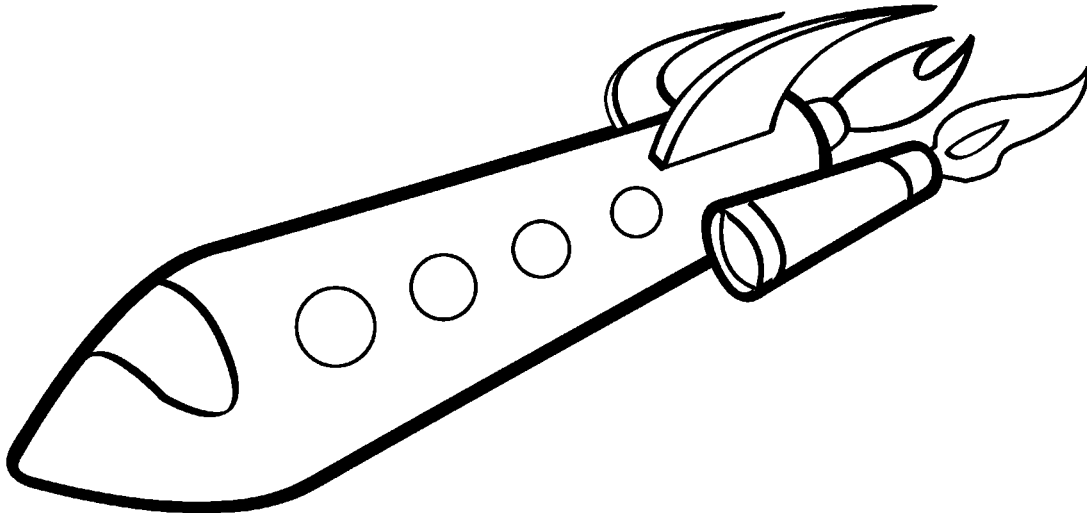













Name _____

Write the answers to these subtraction problems.



$$\begin{array}{r} 652 \\ -331 \\ \hline \end{array}$$


$$\begin{array}{r} 789 \\ -455 \\ \hline \end{array}$$

$$\begin{array}{r} 575 \\ -125 \\ \hline \end{array}$$

$$\begin{array}{r} 312 \\ -217 \\ \hline \end{array}$$

$$\begin{array}{r} 849 \\ -843 \\ \hline \end{array}$$

$$\begin{array}{r} 486 \\ -175 \\ \hline \end{array}$$




$$\begin{array}{r} 379 \\ -207 \\ \hline \end{array}$$

$$\begin{array}{r} 282 \\ -262 \\ \hline \end{array}$$



$$\begin{array}{r} 470 \\ -330 \\ \hline \end{array}$$



Name _____

Compare each pair of numbers. Write $>$ for greater than or $<$ for less than on each line.

$21 \bigcirc 12$

$45 \bigcirc 54$

$14 \bigcirc 7$

$17 \bigcirc 9$

$33 \bigcirc 3$

$2 \bigcirc 20$

$45 \bigcirc 53$


$21 \bigcirc 22$

$13 \bigcirc 14$

$12 \bigcirc 9$

$26 \bigcirc 24$

$15 \bigcirc 50$



Name _____

Subtract the items in the pictures below:

$$\begin{array}{r} 13 \\ - 6 \\ \hline 7 \end{array}$$

$$\begin{array}{r} 16 \\ - 11 \\ \hline \end{array}$$

$$\begin{array}{r} 17 \\ - 4 \\ \hline \end{array}$$

$$\begin{array}{r} 11 \\ - 8 \\ \hline \end{array}$$

Subtract:

| | | | | | |
|--|--|--|--|---|--|
| $\begin{array}{r} 12 \\ - 5 \\ \hline \end{array}$ | $\begin{array}{r} 18 \\ - 7 \\ \hline \end{array}$ | $\begin{array}{r} 15 \\ - 3 \\ \hline \end{array}$ | $\begin{array}{r} 10 \\ - 5 \\ \hline \end{array}$ | $\begin{array}{r} 14 \\ - 13 \\ \hline \end{array}$ | $\begin{array}{r} 19 \\ - 2 \\ \hline \end{array}$ |
|--|--|--|--|---|--|

| | | | | | |
|--|--|---|---|--|--|
| $\begin{array}{r} 16 \\ - 6 \\ \hline \end{array}$ | $\begin{array}{r} 17 \\ - 8 \\ \hline \end{array}$ | $\begin{array}{r} 11 \\ - 11 \\ \hline \end{array}$ | $\begin{array}{r} 15 \\ - 10 \\ \hline \end{array}$ | $\begin{array}{r} 13 \\ - 5 \\ \hline \end{array}$ | $\begin{array}{r} 18 \\ - 3 \\ \hline \end{array}$ |
|--|--|---|---|--|--|

Name _____

Add these numbers. Then fill in the addition table.

$4 + 5 = \underline{\quad}$

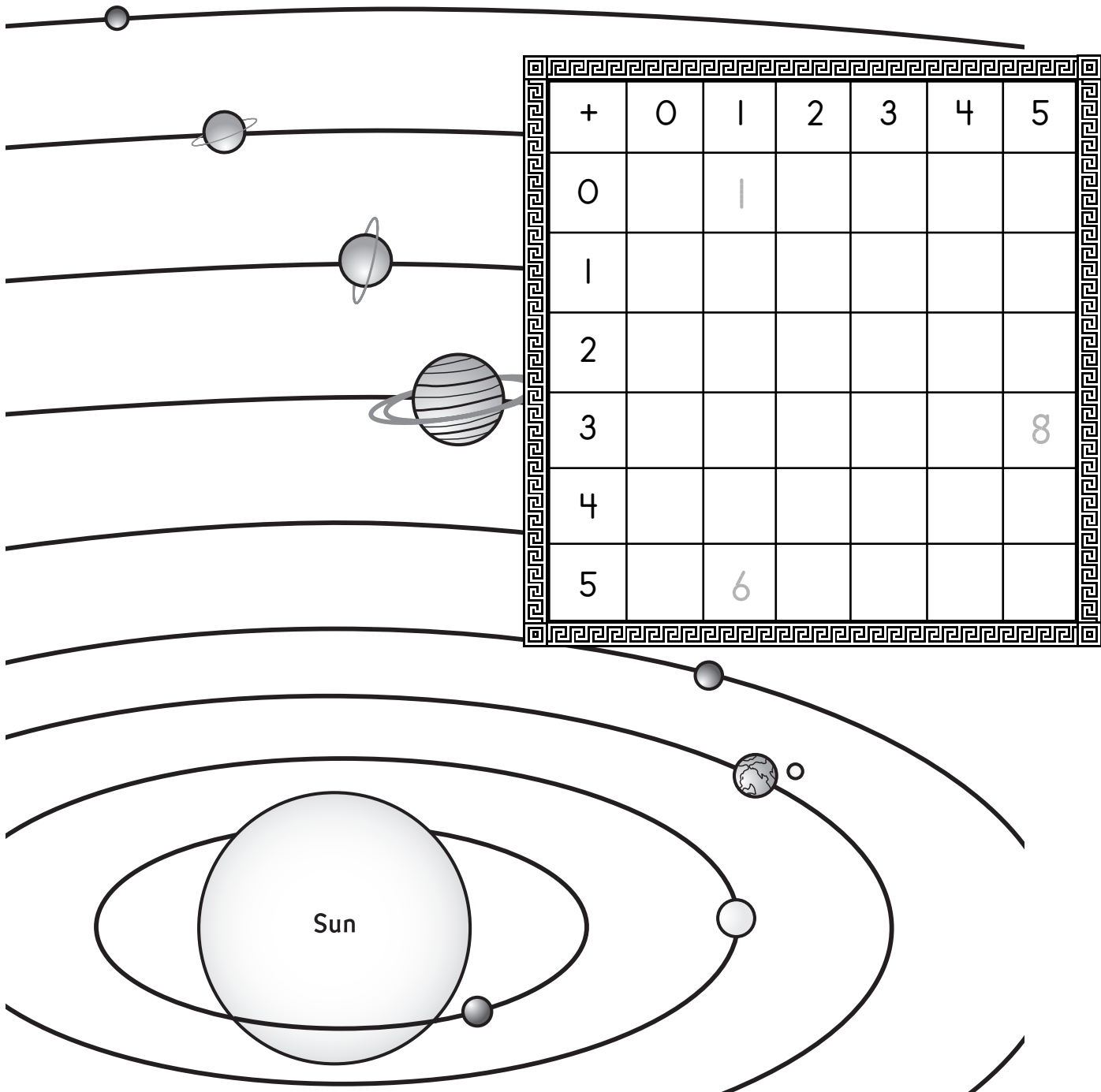
$3 + 2 = \underline{\quad}$

$5 + 0 = \underline{\quad}$

$1 + 4 = \underline{\quad}$

$5 + 5 = \underline{\quad}$

$4 + 3 = \underline{\quad}$



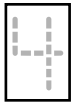
| + | 0 | 1 | 2 | 3 | 4 | 5 |
|---|---|---|---|---|---|---|
| 0 | | 1 | | | | |
| 1 | | | | | | |
| 2 | | | | | | |
| 3 | | | | | | 8 |
| 4 | | | | | | |
| 5 | | 6 | | | | |

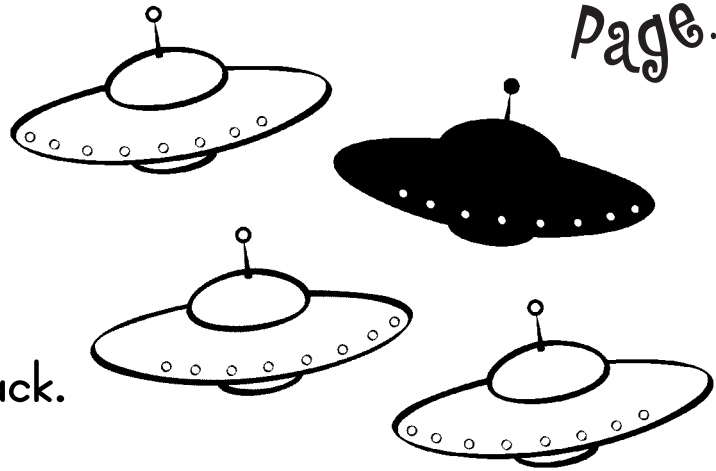
Name _____

 spaceship is black.

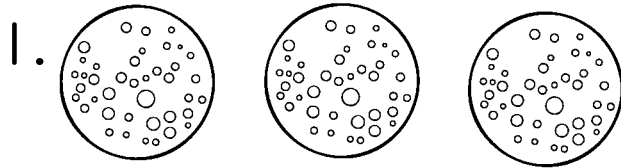
There are  spaceships.

 of the spaceships are black.







Color in the correct pictures to make the following statements true.



$\frac{2}{3}$ of the planets are red.




$\frac{1}{3}$ of the aliens are green.



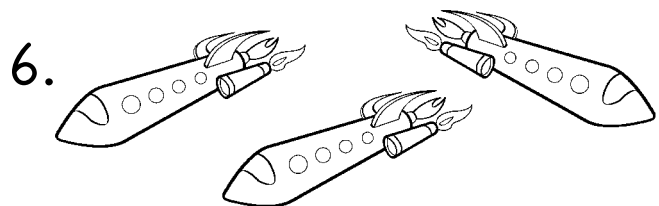
$\frac{1}{3}$ of the satellites are pink.



$\frac{2}{3}$ of the moons are blue.



$\frac{1}{3}$ of the stars are orange.



$\frac{2}{3}$ of the rockets are yellow.

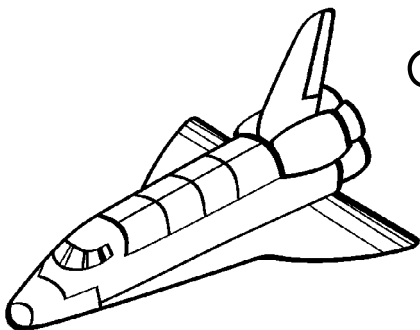
Name _____

Circle the number words for 1-10 in the puzzle.

| | | | | | | | | |
|---|---|---|---|---|---|---|---|---|
| O | V | S | E | V | F | G | T | I |
| N | E | E | I | D | O | H | W | J |
| K | F | V | G | X | N | O | O | L |
| I | V | O | N | E | R | X | Y | F |
| X | E | N | U | P | T | T | S | Q |
| Q | N | Z | F | R | H | W | E | S |
| E | I | G | H | T | R | I | V | N |
| L | N | F | I | V | E | O | E | M |
| H | E | V | P | Q | E | U | N | Z |

GRADE TWO • SPACE • MATH • 012

SKILL: NUMBER WORDS



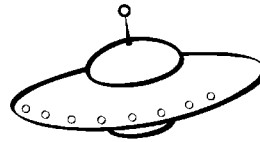

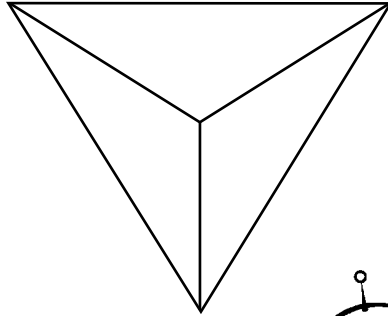
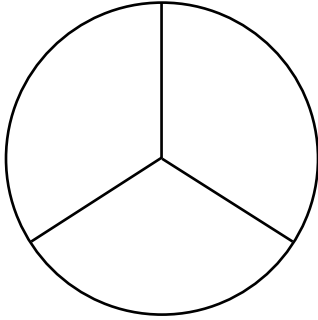
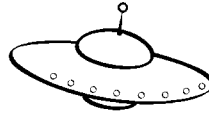
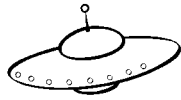
ONE TWO THREE FOUR

FIVE SIX SEVEN

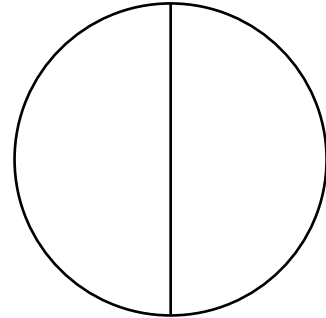
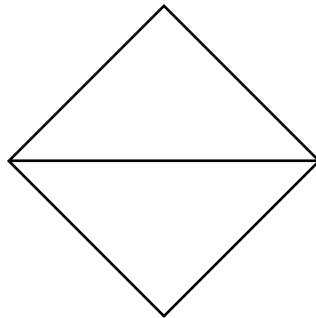
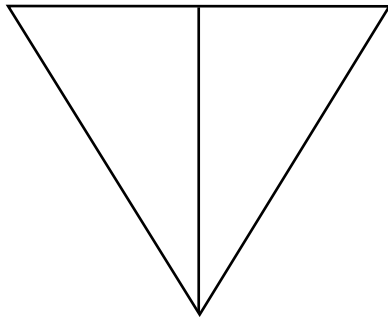
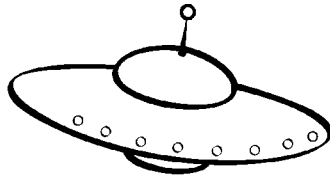
EIGHT NINE TEN

Name _____

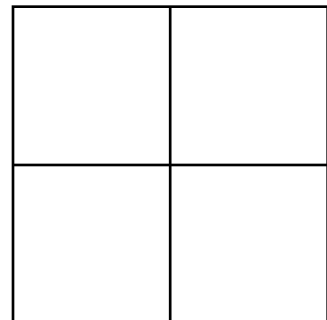

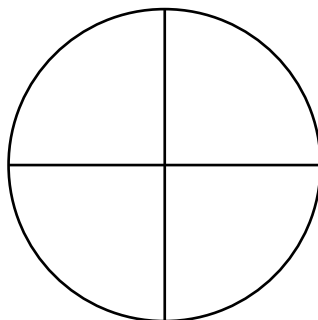
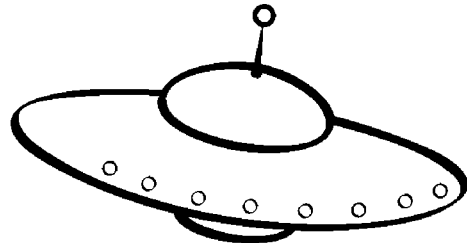
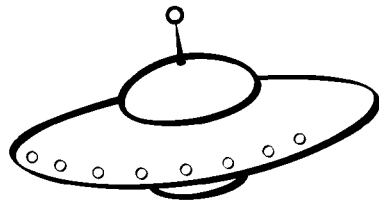
Shade in $\frac{2}{3}$.



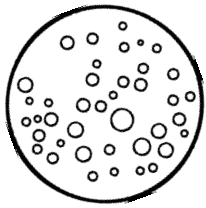
Shade in $\frac{1}{2}$.



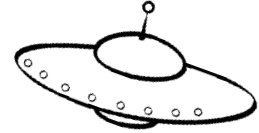
Shade in $\frac{3}{4}$.



Name _____



| ASTRO'S TOY PRICES | |
|--------------------|-----|
| Astronaut | 5¢ |
| Spaceship | 10¢ |
| Moon ball | 12¢ |
| Space shuttle | 25¢ |



Maria has this much money to spend at Astro's Toy store.
First, help her count her coins.



25¢ _____

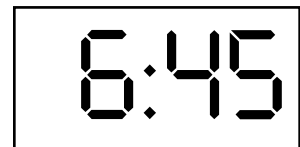
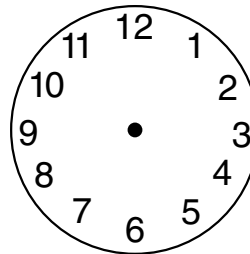


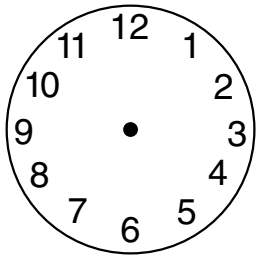
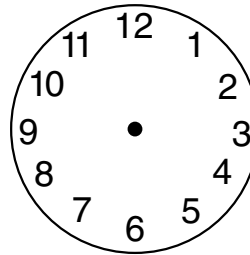


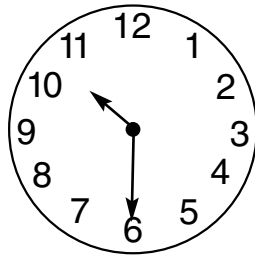
25 + _____ + _____ + _____ + _____ + _____ + _____ = _____ ¢

1. Can Maria buy space shuttles for herself and 2 friends? _____
Cost: _____
2. Maria wants a space shuttle, four astronauts, and two spaceships. Cost: _____
Will she have change left over? _____ How much? _____
3. How many moon balls can Maria buy? _____

Name _____

Analog clocks show time by the position of hands on a dial. Digital clocks display time in numeric digits.


Complete the clocks below by filling in the missing hands or numbers.



Name _____

Fill in the missing numbers.

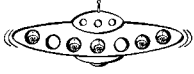
| | | | | | | |
|----|----|----|----|----|----|----|
| | | | | | | 33 |
| 10 | 6 | | 8 | 5 | 7 | 38 |
| | 1 | 10 | 9 | 3 | 8 | 37 |
| 8 | 2 | 6 | 7 | | 5 | 32 |
| 5 | 3 | 4 | | 8 | 2 | 29 |
| 9 | | 7 | 5 | 6 | 10 | 45 |
| 4 | 5 | 6 | 3 | 1 | | 28 |
| 42 | 25 | 35 | 39 | 27 | 41 | 39 |



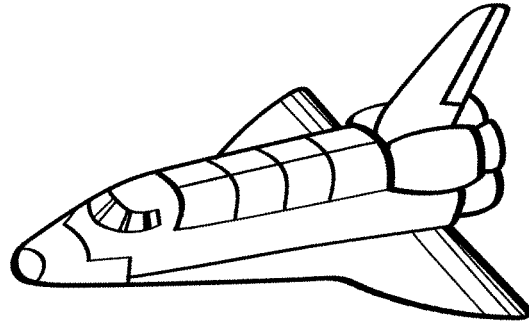
The missing numbers are integers between 0 and 10.
 The numbers in each row add up to the totals to the right.
 The numbers in each column add up to the totals along
 the bottom.
 The diagonal lines also add up to the totals to the right.

Name _____

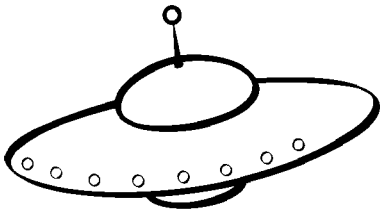
Measure the spacecraft below. Use the ruler and round to the nearest inch.



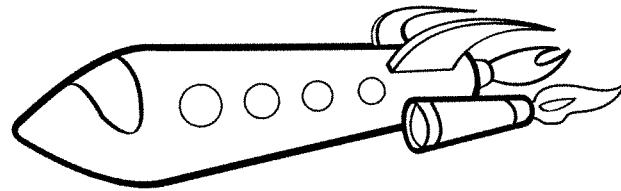
_____ inches




_____ inches



_____ inches



_____ inches




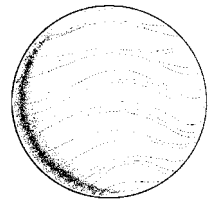
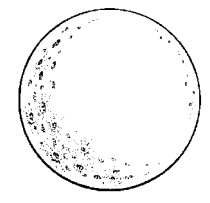


_____ inches



Name _____

Can you buy the planet? Circle Yes or No.

| You want | You have | Can you buy it? | You have | Can you buy it? |
|---|----------|-----------------|----------|-----------------|
| Mars \$37  | \$40 | Yes No | \$35 | Yes No |
| Mercury \$48  | \$46 | Yes No | \$50 | Yes No |
| Neptune \$41  | \$39 | Yes No | \$45 | Yes No |
| Venus \$19  | \$19 | Yes No | \$15 | Yes No |
| Pluto \$21  | \$30 | Yes No | \$20 | Yes No |

Name _____

Write the answers to these multiplication problems.

$$\begin{array}{r} 3 \\ \times 4 \\ \hline \end{array}$$

$$\begin{array}{r} 5 \\ \times 2 \\ \hline \end{array}$$

$$\begin{array}{r} 7 \\ \times 3 \\ \hline \end{array}$$

$$\begin{array}{r} 5 \\ \times 1 \\ \hline \end{array}$$

$$\begin{array}{r} 4 \\ \times 6 \\ \hline \end{array}$$

$$\begin{array}{r} 2 \\ \times 6 \\ \hline \end{array}$$

$$\begin{array}{r} 9 \\ \times 1 \\ \hline \end{array}$$

$$\begin{array}{r} 8 \\ \times 4 \\ \hline \end{array}$$

$$\begin{array}{r} 7 \\ \times 5 \\ \hline \end{array}$$

$$\begin{array}{r} 4 \\ \times 2 \\ \hline \end{array}$$

$$\begin{array}{r} 5 \\ \times 5 \\ \hline \end{array}$$

$$\begin{array}{r} 6 \\ \times 3 \\ \hline \end{array}$$

$$\begin{array}{r} 2 \\ \times 9 \\ \hline \end{array}$$

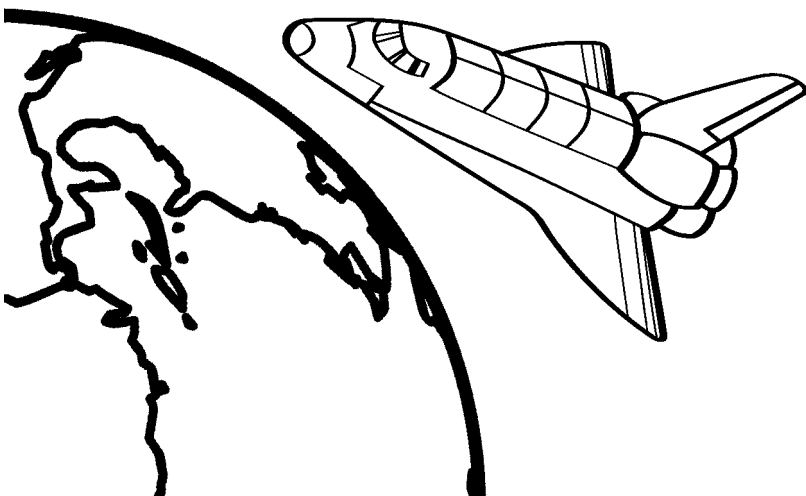
$$\begin{array}{r} 8 \\ \times 6 \\ \hline \end{array}$$

$$\begin{array}{r} 7 \\ \times 4 \\ \hline \end{array}$$

$$\begin{array}{r} 3 \\ \times 9 \\ \hline \end{array}$$

$$\begin{array}{r} 6 \\ \times 6 \\ \hline \end{array}$$

$$\begin{array}{r} 3 \\ \times 1 \\ \hline \end{array}$$



$$\begin{array}{r} 8 \\ \times 7 \\ \hline \end{array}$$

$$\begin{array}{r} 7 \\ \times 2 \\ \hline \end{array}$$

Name _____

Divide the problems.

$8 \overline{)24}$

$3 \overline{)39}$

$2 \overline{)18}$

$5 \overline{)55}$

$9 \overline{)27}$

$4 \overline{)40}$


$7 \overline{)56}$

$5 \overline{)20}$

$3 \overline{)21}$

$4 \overline{)60}$

$3 \overline{)36}$



$5 \overline{)35}$

$8 \overline{)48}$

$4 \overline{)16}$

$6 \overline{)72}$

$9 \overline{)54}$

$6 \overline{)18}$

$7 \overline{)49}$

$1 \overline{)17}$

$2 \overline{)42}$

$6 \overline{)84}$

$8 \overline{)64}$